


WHAT TIME IS IT? - SOLUTIONS

www.happyneuronpro.com

The administrator can make this exercise easier by giving hints as to which clock is behind or ahead of the current time.

Page 1


Find the current time, knowing that one of the following clocks is 2:10 behind the current time and the other is 1:25 ahead of the current time.



The time is 8:35


Page 2

Find the current time, knowing that one of the following clocks is 8:55 behind the current time and the other is 3:10 ahead of the current time.




The time is 1:40

Find the current time, knowing that one of the following clocks is 1:55 ahead of the current time and the other is 2:20 behind the current time.



The time is 11:15

Find the current time, knowing that one of the following clocks is 5:25 behind the current time and the other is 7:15 ahead of the current time.



The time is 5:15