




Count the coins and write the total amount in cents.

1)     = _____

2)    = _____

3)    = _____

4)     = _____

5)     = _____

6)     = _____
